
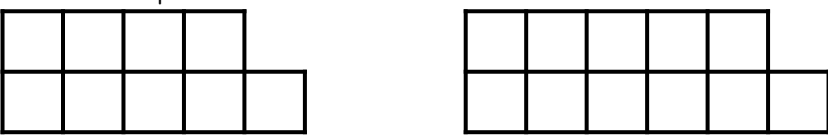
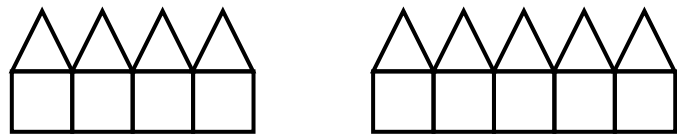


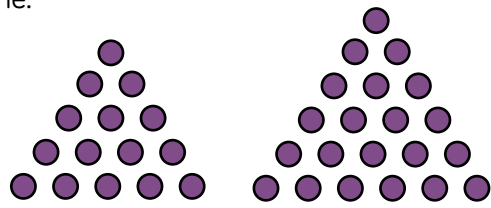


Question	Answer
1	<p>a) Two more circles are added each time.</p> <p>b) </p>
2	<p>a) Two more squares are added each time.</p> <p>b) </p>
3	<p>a) One more square and one more triangle is added each time.</p> <p>b) </p>
4	<p>a) 3 more circles are added each time.</p> <p>b) </p>
5	<p>a) 4 rectangles are added each time.</p> <p>b) </p>
6	<p>a) Three circles are added, then four, then five etc. A new row is added to the triangle each time.</p> <p>b) </p>
7	<p>This could be seen as two squares added each time or the number of squares being tripled each time.</p>
8	<p>Answers vary depending on the number of circles drawn in the first term. Amir could have given this information to help.</p>
9	<p>Various answers depending on the sequence chosen. The number of blocks should decrease from term to term.</p>